

Solve the equation. First simplify the expression by combining like terms.

1) $3(y + 2) = 4(y - 4)$ 1) _____
 A) $\{-10\}$ B) $\{22\}$ C) $\{-22\}$ D) $\{10\}$

2) $2(2z - 2) = 3(z + 3)$ 2) _____
 A) $\{7\}$ B) $\{-5\}$ C) $\{5\}$ D) $\{13\}$

Solve the equation.

3) $7.0p - 6 = 6p + 8$ 3) _____
 A) $\{0\}$ B) $\{13\}$ C) $\{15\}$ D) $\{14\}$

4) $0.200x + 1 = 1.200x$ 4) _____
 A) $\{2\}$ B) $\{-1\}$ C) $\{0.200\}$ D) $\{1\}$

5) $\frac{1}{4}x - 1 = -\frac{3}{4}x$ 5) _____
 A) $\{17\}$ B) $\{1\}$ C) $\{-1\}$ D) $\{-17\}$

6) $9p - 18 = 8p - 8$ 6) _____
 A) $\{9\}$ B) $\{11\}$ C) $\{-3\}$ D) $\{10\}$

7) $-6m + 7 = -7m + 10$ 7) _____
 A) $\{3\}$ B) $\{-3\}$ C) $\{4\}$ D) $\{2\}$

Solve the equation. First simplify the expression by combining like terms.

8) $-3a + 2 + 4a = 12 - 26$ 8) _____
 A) $\{-40\}$ B) $\{-16\}$ C) $\{40\}$ D) $\{16\}$

9) $-8b + 1 + 6b = -3b + 6$ 9) _____
 A) $\{-6\}$ B) $\{5\}$ C) $\{-1\}$ D) $\{6\}$

10) $9.9x - 2.8 - 9.8x = 0.1x - 2.8$ 10) _____
 A) $\{0\}$ B) $\{1\}$ C) $\{-1\}$ D) $\{0.1\}$

Solve the equation.

11) $\frac{1}{3}x = -9$ 11) _____
 A) $\{-27\}$ B) $\{-3\}$ C) $\{-7\}$ D) $\{-6\}$

12) $\frac{1}{15}b = -4.98$ 12) _____
 A) $\{-74.70\}$ B) $\{-4.00\}$ C) $\{9.02\}$ D) $\{10.02\}$

13) $\frac{n}{5} = 4$ 13) _____
 A) $\{20\}$ B) $\{0\}$ C) $\{8\}$ D) $\{9\}$

14) $-x = -34$ 14) _____
 A) $\{34\}$ B) $\{0\}$ C) $\{1\}$ D) $\{-34\}$

- 15) $18x - 9x + 7x = 32$ 15) _____
 A) $\left\{\frac{1}{16}\right\}$ B) $\left\{\frac{1}{2}\right\}$ C) {16} D) {2}
- 16) $\frac{x}{8} + 9 = 18$ 16) _____
 A) 17 B) 218 C) 216 D) 72
- 17) $\frac{1}{2}f - 4 = 1$ 17) _____
 A) 6 B) -6 C) 10 D) -10
- 18) $-7x - 7 + 4x + 3 = 7$ 18) _____
 A) -1 B) $\frac{11}{3}$ C) 1 D) $-\frac{11}{3}$
- 19) $\frac{1}{4}(x + 6) = \frac{1}{8}(x + 8)$ 19) _____
 A) 4 B) -4 C) {3} D) -12
- 20) $\frac{1}{3}x - \frac{1}{3} = -2$ 20) _____
 A) 5 B) -5 C) -7 D) 7
- 21) $\frac{2}{5}x - \frac{1}{3}x = 3$ 21) _____
 A) -45 B) 45 C) -90 D) 90
- 22) $\frac{1}{5}x + \frac{6}{5} = \frac{1}{7}x + \frac{8}{7}$ 22) _____
 A) 1 B) -1 C) 2 D) -2
- 23) $0.15(40) + 0.60x = 0.40(40 + x)$ 23) _____
 A) 60 B) 50 C) 25 D) 40
- 24) $0.80x - 0.60(50 + x) = -0.48(50)$ 24) _____
 A) 15 B) 40 C) 30 D) 20

Solve the problem.

- 25) One half of a number is 3 more than one-sixth the same number. What is the number? 25) _____
 A) 12 B) 9 C) 18 D) 8
- 26) If 3 is added to a number and the sum is doubled, the result is 1 less than the number. Find the number. 26) _____
 A) -7 B) -5 C) 5 D) -2

- 27) A merchant has coffee worth \$20 a pound that she wishes to mix with 50 pounds of coffee worth \$80 a pound to get a mixture that can be sold for \$60 a pound. How many pounds of the \$20 coffee should be used? 27) _____
- A) 37.5 pounds B) 25 pounds C) 75 pounds D) 12.5 pounds

Solve. If needed, round money amounts to two decimal places and all other amounts to one decimal place.

- 28) How much pure acid should be mixed with 3 gallons of a 50% acid solution in order to get an 80% acid solution? 28) _____
- A) 4.5 gal B) 7.5 gal C) 12 gal D) 1.5 gal

- 29) The manager of a coffee shop has one type of coffee that sells for \$7 per pound and another type that sells for \$13 per pound. The manager wishes to mix 50 pounds of the \$13 coffee to get a mixture that will sell for \$9 per pound. How many pounds of the \$7 coffee should be used? 29) _____
- A) 50 pounds B) 75 pounds C) 100 pounds D) 150 pounds

Solve. Round all amounts to one decimal place.

- 30) What number is 83% of 277? 30) _____
- A) 2299 B) 229.9 C) 22,990 D) 23

- 31) 10% of what number is 86? 31) _____
- A) 86 B) 8.6 C) 860 D) 8600

Substitute the given values into the formula and solve for the unknown variable.

- 32) $d = rt$; $t = 5$, $d = 10$ 32) _____
- A) 5 B) 15 C) 0.5 D) 2

- 33) $V = \frac{1}{3}Ah$; $V = 20$, $h = 4$ 33) _____
- A) 5 B) 80 C) 24 D) 15

- 34) Use the formula $F = \frac{9}{5}C + 32$ to convert 10°C to degrees Fahrenheit. 34) _____
- A) -14°F B) -12.2°F C) 23.4°F D) 50°F

Solve the problem.

- 35) Find the measure of an angle whose supplement is 6 times the measure of its complement. 35) _____
- A) 36° B) 30° C) 15° D) 72°

- 36) Find the measure of an angle if its supplement measures 285° less than 6 times its complement. 36) _____
- A) 83.5° B) 167° C) 7° D) 15°

Solve.

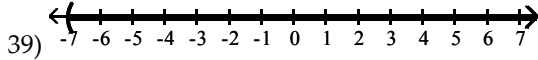
- 37) A motorcycle traveling at 70 miles per hour overtakes a car traveling at 40 miles per hour that had a three-hour head start. How far from the starting point are the two vehicles? 37) _____
- A) $76\frac{4}{11}$ mi B) 280 mi C) 7 mi D) 4 mi

38) Jeff starts driving at 55 miles per hour from the same point that Lauren starts driving at 50 miles per hour. They drive in opposite directions, and Lauren has a half-hour head start. How long will they be able to talk on their cell phones that have a 360-mile range?

- A) $3\frac{4}{21}$ hr B) $3\frac{89}{210}$ hr C) $3\frac{2}{3}$ hr D) $3\frac{3}{7}$ hr

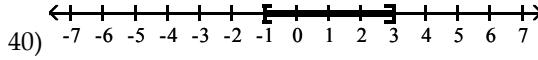
38) _____

Write an inequality involving the variable x that describes the set of numbers graphed.



- A) $x > -7$ B) $x < -7$ C) $x \leq -7$ D) $x \geq -7$

39) _____



- A) $-1 \leq x < 3$ B) $-1 \leq x \leq 3$ C) $-1 < x < 3$ D) $-1 < x \leq 3$

40) _____

Solve the inequality and write the solution set in interval notation.

41) $11x < 33$

- A) $(-\infty, 3)$ B) $(3, \infty)$ C) $(-\infty, -3)$ D) $(-3, \infty)$

41) _____

42) $-5x \geq 25$

- A) $(-\infty, -5]$ B) $(-\infty, 5]$ C) $[-5, \infty)$ D) $[5, \infty)$

42) _____

43) $13x > 0$

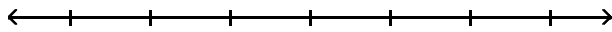
- A) $(-\infty, 0)$ B) $(0, \infty)$ C) $(-\infty, \infty)$ D) No solution

43) _____

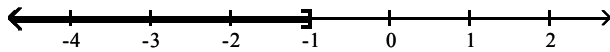
Solve the inequality. Write the solution set in interval notation and graph it.

44) $16x - 32 > 4(3x - 9)$

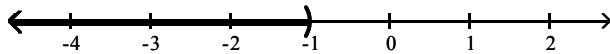
44) _____



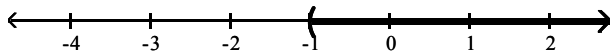
- A) $(-\infty, -1]$



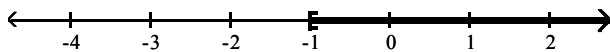
- B) $(-\infty, -1)$



- C) $(-1, \infty)$

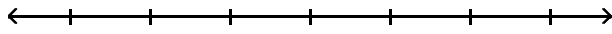


- D) $[-1, \infty)$

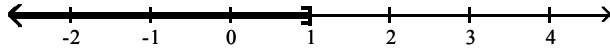


45) $16n - 24 \leq 4(3n - 5)$

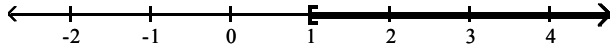
45) _____



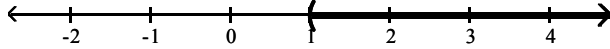
A) $(-\infty, 1]$



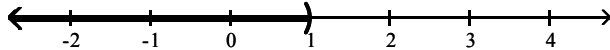
B) $[1, \infty)$



C) $(1, \infty)$



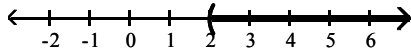
D) $(-\infty, 1)$



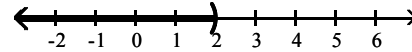
46) $2x + 6 + 5x < 8 + 5x + 2$

46) _____

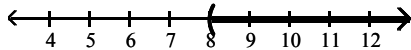
A) $(2, \infty)$



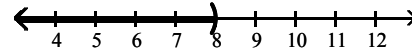
B) $(-\infty, 2)$



C) $(8, \infty)$



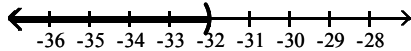
D) $(-\infty, 8)$



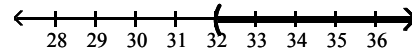
47) $-2(x + 8) + 48x < -6(-8x + 8) - 3x$

47) _____

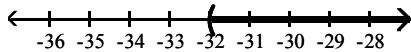
A) $(-\infty, -32)$



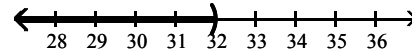
B) $(32, \infty)$



C) $(-32, \infty)$



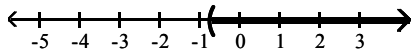
D) $(-\infty, 32)$



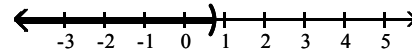
48) $\frac{1}{5}(x + 3) > \frac{1}{9}(x + 6)$

48) _____

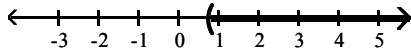
A) $(-0.75, \infty)$



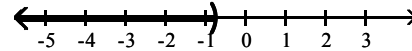
B) $(-\infty, 0.75)$



C) $(0.75, \infty)$



D) $(-\infty, -0.75)$

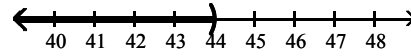
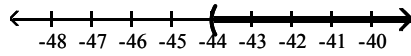


49) $-1(-9x + 12) + 5(x + 10) > -1(-9x - 4) + 3(x - 18)$

49) _____

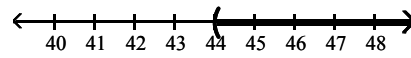
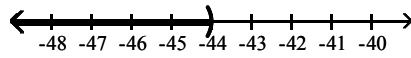
A) $(-44, \infty)$

B) $(-\infty, 44)$



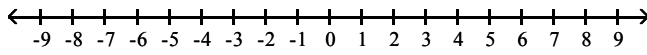
C) $(-\infty, -44)$

D) $(44, \infty)$

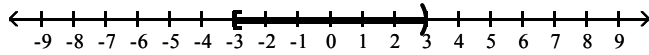


50) $6 < 2x \leq 14$

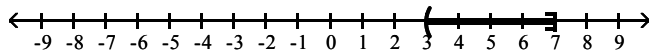
50) _____



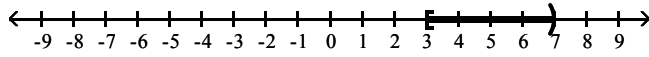
A) $[-3, 3)$



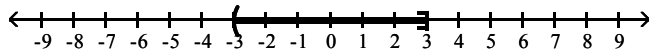
B) $(3, 7]$



C) $[3, 7)$



D) $(-3, 3]$



Answer Key
Testname: PP2

- 1) B
- 2) D
- 3) D
- 4) D
- 5) B
- 6) D
- 7) A
- 8) B
- 9) B
- 10) A
- 11) A
- 12) A
- 13) A
- 14) A
- 15) D
- 16) D
- 17) C
- 18) D
- 19) B
- 20) B
- 21) B
- 22) B
- 23) B
- 24) C
- 25) B
- 26) A
- 27) B
- 28) A
- 29) C
- 30) B
- 31) C
- 32) D
- 33) D
- 34) D
- 35) D
- 36) D
- 37) B
- 38) A
- 39) A
- 40) B
- 41) A
- 42) A
- 43) B
- 44) C
- 45) A
- 46) B
- 47) A
- 48) C
- 49) A
- 50) B